

VIRGINIA STANDARDS OF LEARNING

Spring 2007 Released Test

GRADE 8 MATHEMATICS

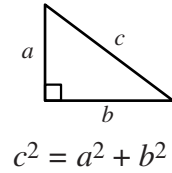
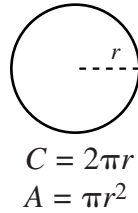
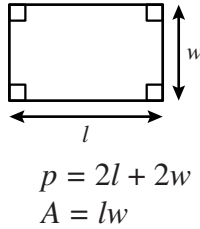
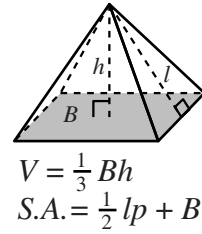
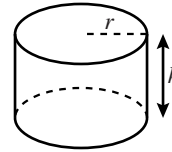
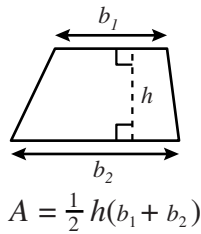
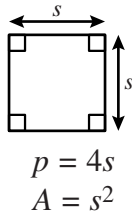
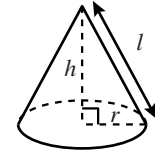
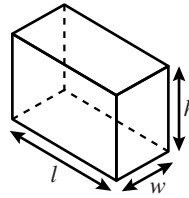
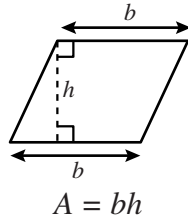
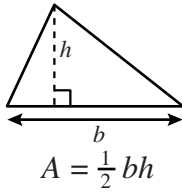
Form M0117, CORE 1

Property of the Virginia Department of Education

©2007 by the Commonwealth of Virginia, Department of Education, P.O. Box 2120, Richmond, Virginia 23218-2120. All rights reserved. Except as permitted by law, this material may not be reproduced or used in any form or by any means, electronic or mechanical, including photocopying or recording, or by any information storage or retrieval system, without written permission from the copyright owner. Commonwealth of Virginia public school educators may reproduce any portion of these released tests for non-commercial educational purposes without requesting permission. All others should direct their written requests to the Virginia Department of Education, Division of Student Assessment and School Improvement, at the above address or by e-mail to Student_Assessment@doe.virginia.gov.

Grade 8 Mathematics Formula Sheet

Geometric Formulas



Abbreviations

milligram	mg
gram	g
kilogram	kg
milliliter	mL
liter	L
kiloliter	kL
millimeter	mm
centimeter	cm
meter	m
kilometer	km
square centimeter	cm ²
cubic centimeter	cm ³

ounce	oz
pound	lb
quart	qt
gallon	gal.
inch	in.
foot	ft
yard	yd
mile	mi.
square inch	sq in.
square foot	sq ft
cubic inch	cu in.
cubic foot	cu ft

volume	V
total surface area	S.A.
area of base	B

year	yr
month	mon
hour	hr
minute	min
second	sec

Pi

$\pi \approx 3.14$
 $\pi \approx \frac{22}{7}$

Directions

Read and solve each question. Then mark the space on your answer document for the best answer.

SAMPLE

Vicki had \$228. She spends \$37 on a gift. How much did she have left?

- A** \$211
- B** \$191
- C** \$181
- D** \$164

1 Which is equivalent to this expression?

$$(6 - 3)^4$$

- A** 1,280
- B** 81
- C** 12
- D** 7

2 Which set contains $\sqrt{7}$?

- F** {Rational numbers}
- G** {Natural numbers}
- H** {Irrational numbers}
- J** {Integers}

3 Which number is *not* equivalent to the other three?

A 0.8×1^2

B 8×10^2

C 80×10^1

D 800×1^1

4 Which number has the *least* value?

F 7.63×10^4

G 3.55×10^6

H 9.98×10^3

J 1.05×10^5

5 Which of the following has a different value than the others?

A $\frac{6}{8}$

B $\frac{3}{4}$

C 50%

D 0.75

6 Which subset of real numbers does *not* contain the number 1?

- F** Whole numbers
- G** Irrational numbers
- H** Integers
- J** Natural numbers

7 Which operation should be performed first to simplify the following?

$$15 - 9 \div (-3)^2$$

- A** Subtract 9 from 15
- B** Divide 9 by (-3)
- C** Multiply 2 times (-3)
- D** Square (-3)

8 What is the value of $(n-2)^2 + n - 1$ when $n = 4$?

- F 7
- G 9
- H 15
- J 17

9 The scale blueprint of a rectangular patio is drawn $\frac{1}{8}$ inch to 1 foot. If the patio is 14 feet long, what is the measure of the patio's length on the blueprint?

- A $\frac{8}{14}$ in.
- B $\frac{4}{7}$ in.
- C $1\frac{3}{4}$ in.
- D $3\frac{1}{4}$ in.

10 Which of the following is a perfect square?

- F** 5
- G** 10
- H** 11
- J** 16

11 Fuji apples sold for \$1.29 per pound while Golden Delicious apples were on sale for \$0.89 per pound. Sandi bought $3\frac{1}{2}$ pounds of each kind. How much more did she pay for the Fuji apples than the Golden Delicious apples?

- A** \$1.40
- B** \$3.12
- C** \$4.51
- D** \$7.63

12 If $x = 8$, what is the value of this expression?

$$\frac{x}{4} - 3$$

- F** -2.5
- G** -1
- H** 1
- J** 2.5

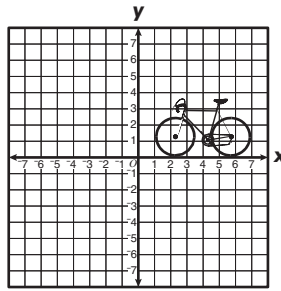
13 Which number is a perfect square?

- A** 1
- B** 2
- C** 5
- D** 8

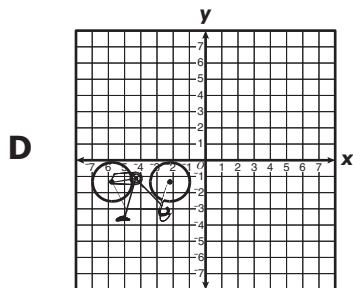
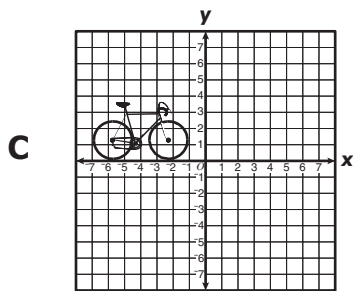
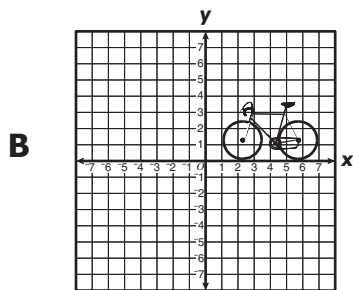
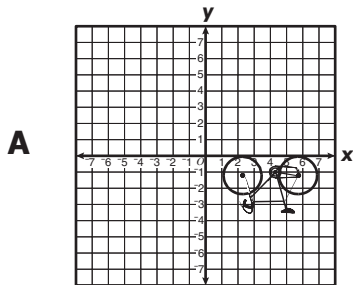
14 Harry and Connie bought tomatoes at the farmer's market. Harry paid \$4.32 for 6 pounds of tomatoes. At that rate, how much should Connie have paid for 5 pounds of tomatoes?

- F** \$2.16
- G** \$3.60
- H** \$5.04
- J** \$5.18

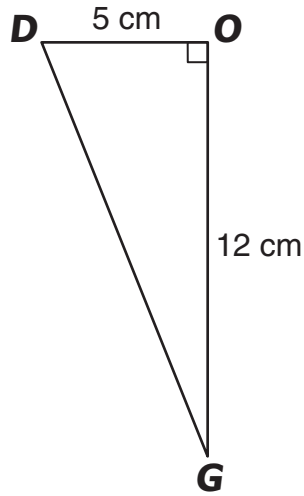
15 Reflect the figure across the y -axis.



Which is most likely the new figure?



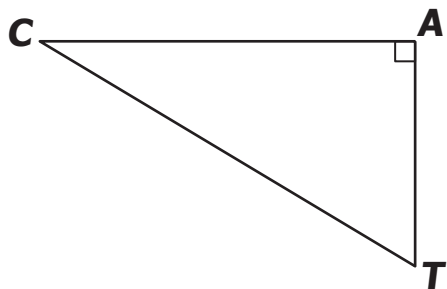
16 Dale drew triangle DOG with the given measurements.



What is the measure of \overline{DG} ?

- F** 17 cm
- G** 13 cm
- H** 11 cm
- J** 7 cm

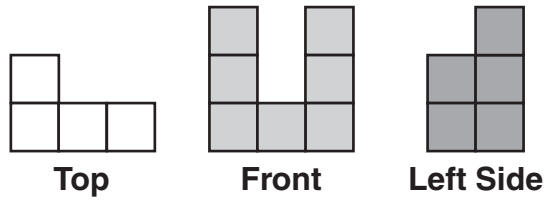
17 Triangle *CAT* was in Cedric's mathematics book.



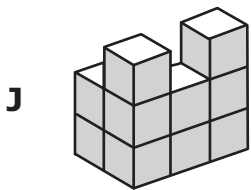
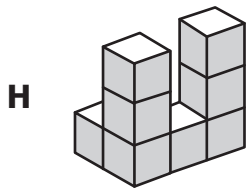
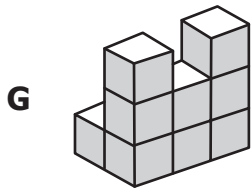
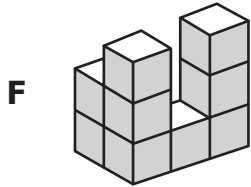
Which is the hypotenuse of the triangle?

- A $\angle TAC$
- B \overline{TA}
- C $\angle CTA$
- D \overline{CT}

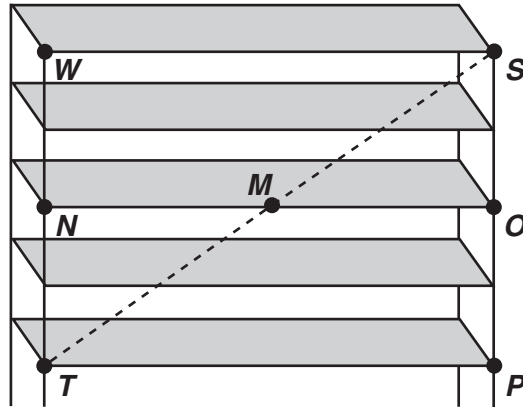
18 This shows 3 different views of a three-dimensional figure made from cubes.



Which could be a drawing of the figure?



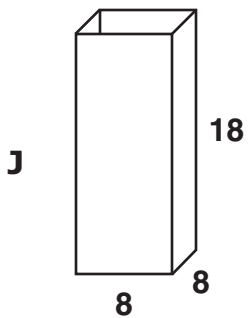
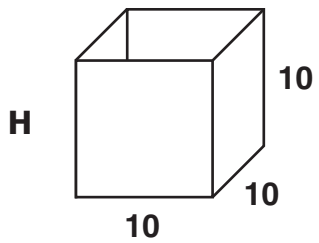
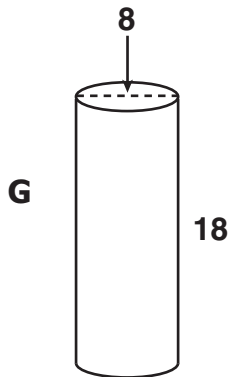
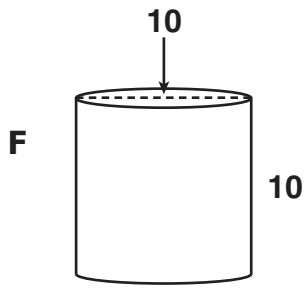
19 Betty added a support to her metal shelves.

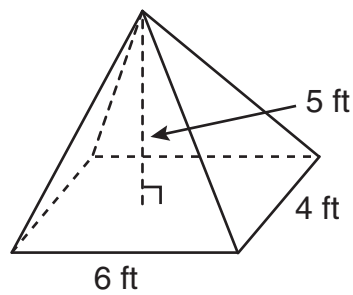
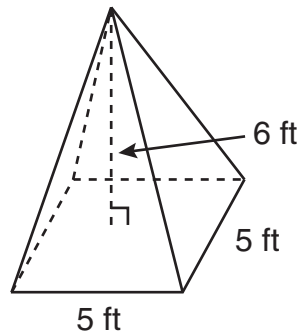


If $\angle SMO$ measures 45° , what is the measure of $\angle SMN$?

- A 45°
- B 90°
- C 135°
- D 180°

20 If all measurements of the right prisms and cylinders are in inches, which container has the greatest volume?

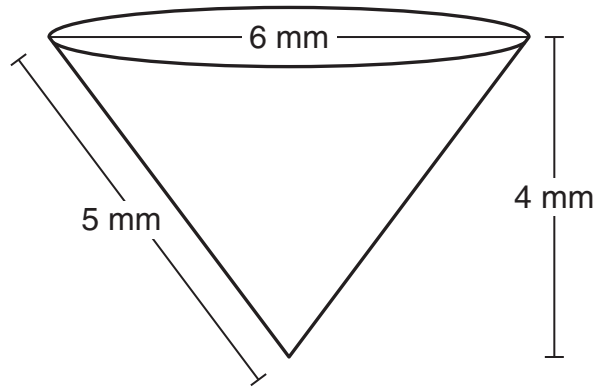


**Pyramid I****Pyramid II**

Which statement about the volumes of the two pyramids shown above is true?

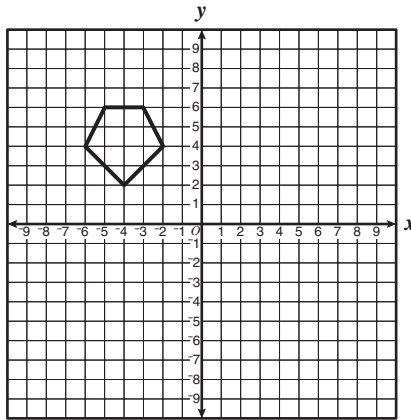
- A** The volume of Pyramid II is 10 times the volume of Pyramid I.
- B** The volumes of Pyramid II and Pyramid I are the same.
- C** Pyramid II has 10 more cubic feet of volume than Pyramid I.
- D** Pyramid II has 30 more cubic feet of volume than Pyramid I.

22 Which is closest to the surface area of a cone with dimensions as shown?

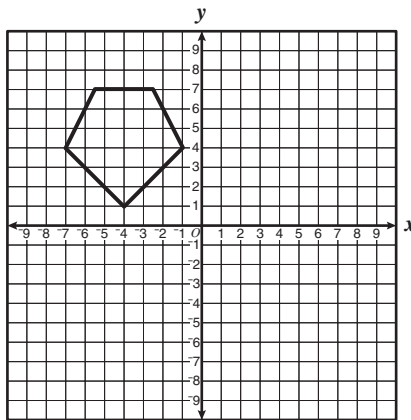


- F 66 mm^2
- G 75 mm^2
- H 113 mm^2
- J 207 mm^2

23 A transformation was performed on the following figure.



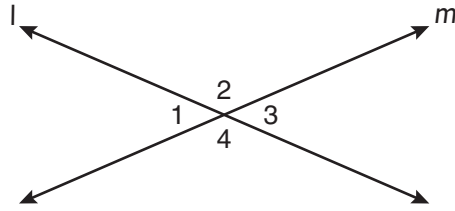
The result is the figure below.



What type of transformation was performed on the original figure?

- A Dilation
- B Reflection
- C Rotation
- D Translation

24 Lines l and m intersect, forming the angles indicated in the drawing.




Which of the following statements *must* be true?

- F $\angle 1$ is congruent to $\angle 2$.
- G $\angle 1$ is supplementary to $\angle 3$.
- H $\angle 2$ is congruent to $\angle 4$.
- J $\angle 2$ is supplementary to $\angle 4$.

25 A figure has the views shown.

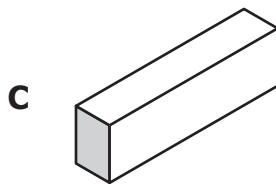
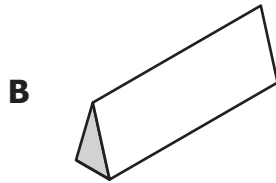
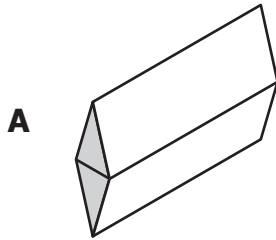


Front View

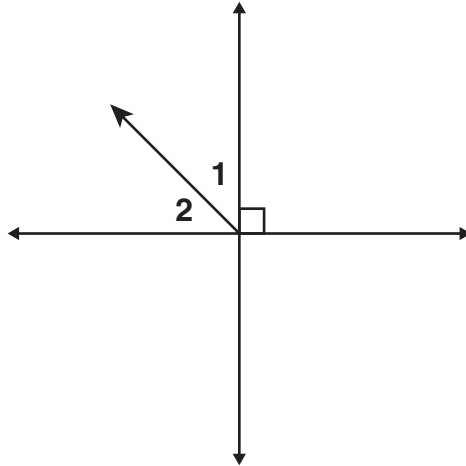


Right Side View

Which represents the figure?



26 Two lines and a ray intersect at a single point as shown below.



In the drawing above, what is $m\angle 1$ if $m\angle 2 = 40^\circ$?

- F 40°
- G 45°
- H 50°
- J 55°

27 Which matrix has a 2 and a 5 in the same column?

A $\begin{bmatrix} 2 & 0 & 2 \\ 0 & 5 & 0 \\ 0 & 0 & 0 \end{bmatrix}$

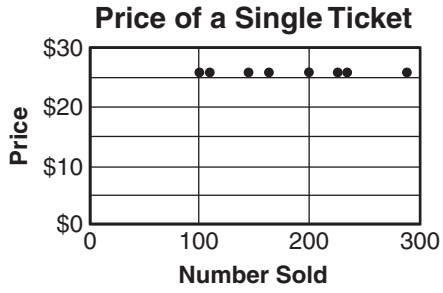
B $\begin{bmatrix} 0 & 1 & 1 \\ 2 & 1 & 5 \\ 2 & 5 & 1 \end{bmatrix}$

C $\begin{bmatrix} 2 & 3 & 4 \\ 7 & 8 & 9 \\ 4 & 5 & 6 \end{bmatrix}$

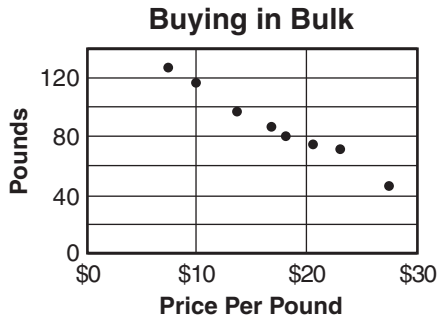
D $\begin{bmatrix} 1 & 2 & 3 \\ 4 & 5 & 6 \\ 7 & 8 & 9 \end{bmatrix}$

28 Which scattergram contains data with a positive relationship?

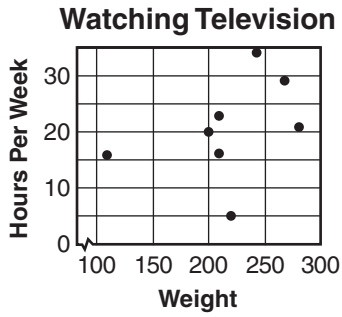
F



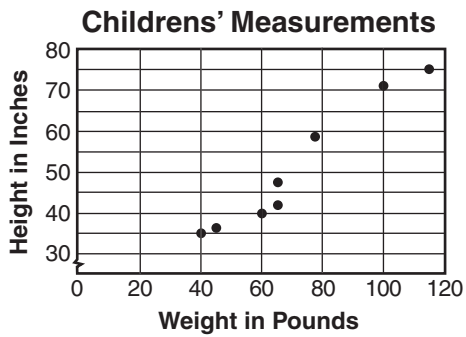
G



H



J



29 During basketball practice, Jada attempted 52 free throws and made 16 of them. Based on that rate, what is the probability that she will make the next free throw she attempts?

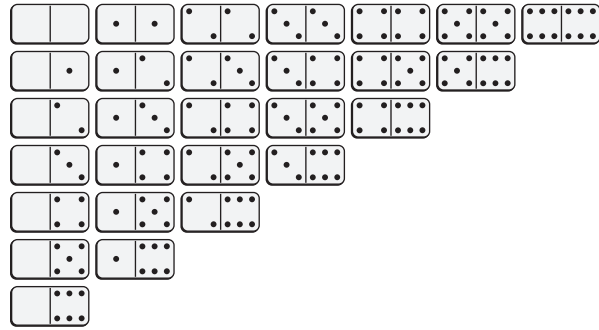
A $\frac{4}{13}$

B $\frac{4}{9}$

C $\frac{5}{9}$

D $\frac{9}{13}$

30 This is a standard set of dominoes.



The dominoes are turned over and shuffled thoroughly, and one is chosen at random. What is the probability that the *total* number of spots showing on the one chosen will be greater than 6?

F $\frac{2}{7}$

G $\frac{3}{7}$

H $\frac{11}{28}$

J $\frac{4}{9}$

31 Rocky has a $\frac{3}{140}$ chance of winning a trip to New York City. Which of the following best describes Rocky's chances of winning the trip?

- A It is certain that Rocky will win the trip.
- B It is likely that Rocky will win the trip.
- C It is unlikely that Rocky will win the trip.
- D It is impossible that Rocky will win the trip.

32 Which is a 2-by-6 matrix?

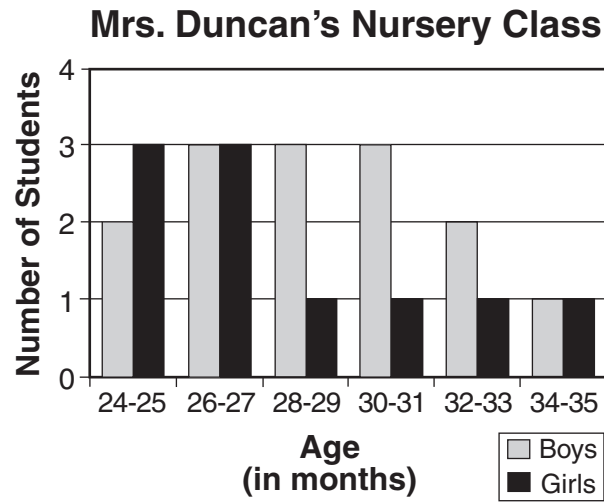
$$\mathbf{F} \begin{bmatrix} 1 & 1 \\ 5 & 7 \\ 2 & 9 \\ 6 & 6 \\ 3 & 0 \\ 7 & 4 \end{bmatrix}$$

$$\mathbf{G} \begin{bmatrix} 6 & 6 \\ 6 & 6 \end{bmatrix}$$

$$\mathbf{H} \begin{bmatrix} 2 & 2 & 2 \\ 2 & 2 & 2 \end{bmatrix}$$

$$\mathbf{J} \begin{bmatrix} 1 & 5 & 2 & 6 & 3 & 7 \\ 1 & 7 & 9 & 6 & 0 & 4 \end{bmatrix}$$

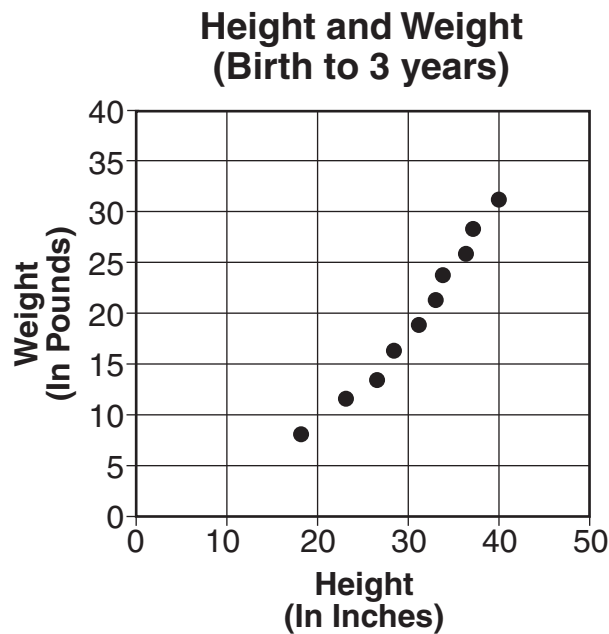
33 The graph below shows the ages in months of the boys and girls in Mrs. Duncan's nursery class.



Which conclusion can be justified by the data shown in the bar graph?

- A The students in the class are at least 2 years old.
- B There are more girls than boys who are 26 to 27 months old in the class.
- C Most students in the class are older than 30 months.
- D There are more girls than boys in the class.

- 34 The scatterplot below shows Sarah's height and weight at various times from birth to her third birthday.



Based on the scatterplot, which of the following conclusions about the relationship between her height and weight is true?

- F** There is a negative relationship between height and weight.
- G** There is a positive relationship between height and weight.
- H** There is a constant relationship between height and weight.
- J** There is no relationship between height and weight.

35 A function of x containing four ordered pairs of the form (x, y) is shown below.

$$\{(1, 3), (2, 4), (5, 7), (6, 8)\}$$

What is the domain of the function?

- A** $\{1, 2, 5, 6\}$
- B** $\{3, 4, 7, 8\}$
- C** $\{1, 2, 3, 4\}$
- D** $\{5, 6, 7, 8\}$

36 Given the function of x defined by

$$y = 3x + 5,$$

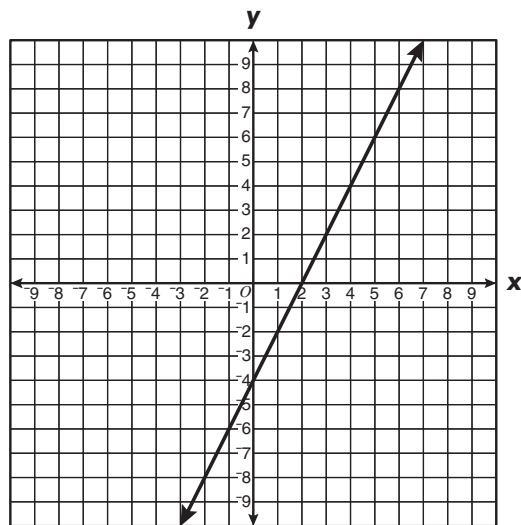
if the domain is $\{-4, -1, 2, 5\}$, what is the range?

- F** $\{-20, -11, -2, 7\}$
- G** $\{-7, -3, -2, -1\}$
- H** $\{-3, -2, -1, 0\}$
- J** $\{-7, 2, 11, 20\}$

$x \cdot x^2 = x^3$
$x^2 \cdot x^2 = x^4$
$x^3 \cdot x^2 = x^5$
$x^4 \cdot x^2 = x^6$
$x^5 \cdot x^2 = x^7$

Which statement generalizes the pattern shown in the table above?

- A** $x^m \cdot x^n = x^{(m+n)}$
- B** $x^m \cdot x^n = x^{(n-m)}$
- C** $x^m \cdot x^n = x^{(m-n)}$
- D** $x^m \cdot x^n = x^{(m+m)}$



Which could be the table of values that was used to graph the function of x shown?

F

x	y
0	4
2	0
4	4
6	8

G

x	y
0	-4
1	0
2	4
3	8

H

x	y
0	-4
1	-2
2	0
3	3

J

x	y
0	-4
2	0
4	4
6	8

39 What is the solution to $\frac{x}{4} + 10 = 34$?

- A 4
- B 6
- C 96
- D 144

40 The formula shows that c , the total cost of buying pizzas at Al's Restaurant, depends on p , the number of pizzas ordered.

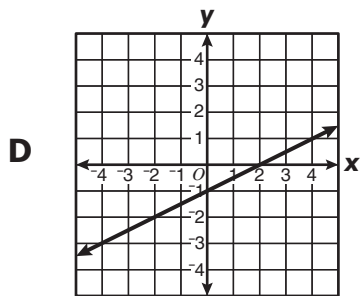
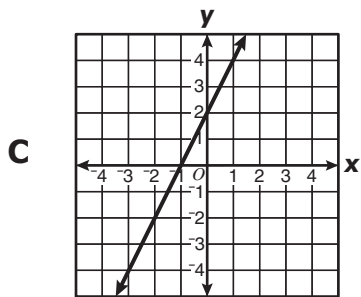
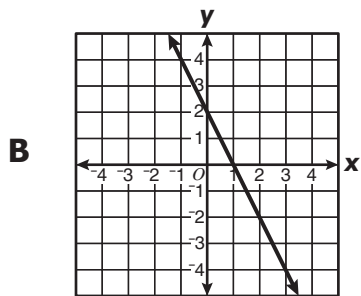
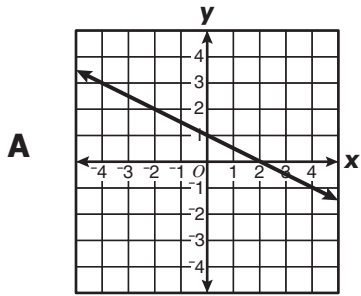
$$c = 9p$$

What is the independent variable in the formula?

- F p
- G c
- H 9
- J =

x	y
-1	4
0	2
1	0

Which graph best represents the line defined by the table of ordered pairs?



42 What is the solution to the proportion below?

$$\frac{x}{50} = \frac{5.5}{1}$$

- F 275
- G 27.5
- H 9.09
- J $9\frac{1}{11}$

43 Which table could be used to graph the following?

$$y = \frac{1}{3}x + 7$$

A

x	y
-3	6
0	7
3	8
6	9

B

x	y
-3	$1\frac{1}{3}$
0	$2\frac{1}{3}$
3	$3\frac{1}{3}$
6	$4\frac{1}{3}$

C

x	y
-3	4
0	7
3	10
6	13

D

x	y
-3	$-2\frac{2}{3}$
0	$\frac{1}{3}$
3	$2\frac{1}{3}$
6	$4\frac{1}{3}$

44 Which is the closest to the circumference of a circle with a diameter of 17 inches?

F 27 in.

G 53 in.

H 227 in.

J 907 in.

45 A cylindrical chemical tank is 12 feet high and has a diameter of 45 feet. Which is closest to the number of cubic feet of liquid the tank will hold?

A 38,151

B 19,076

C 15,890

D 141

46

x	y
0	-1
2	3
3	5
4	7

Which is true for all pairs of values in the table above?

F $y = \frac{x-1}{2}$

G $y = 2x - 1$

H $y = x - 1$

J $y = x + 1$

47 What value of x makes the following statement true?

$$19 = 5x + 4$$

A 23

B 15

C 4

D 3

48 Which is one of the solutions to the following?

$$2x + 4 < 12$$

- F 6
- G 5
- H 4
- J 3

49 Which is a table of ordered pairs defined by $y = 2x - 12$?

A

x	12	15	22	30
y	12	18	32	48

B

x	10	12	14	16
y	-4	0	4	8

C

x	5	6	10	12
y	22	24	32	36

D

x	10	15	20	25
y	-2	3	8	13

50 Which table of ordered pairs could be used to graph $y = 4x - 5$?

F

x	0	1	3	5
y	-1	1	-7	-20

G

x	0	1	3	5
y	-5	-1	7	15

H

x	0	1	3	5
y	0	-2	-6	-10

J

x	0	1	3	5
y	4	0	-4	-8



Answer Key-8075-M0117

Test Sequence Number	Correct Answer	Reporting Category	Reporting Category Description
1	B	001	Number and Number Sense
2	H	001	Number and Number Sense
3	A	001	Number and Number Sense
4	H	001	Number and Number Sense
5	C	001	Number and Number Sense
6	G	001	Number and Number Sense
7	D	001	Number and Number Sense
8	F	002	Computation and Estimation
9	C	002	Computation and Estimation
10	J	002	Computation and Estimation
11	A	002	Computation and Estimation
12	G	002	Computation and Estimation
13	A	002	Computation and Estimation
14	G	002	Computation and Estimation
15	C	003	Measurement and Geometry
16	G	003	Measurement and Geometry
17	D	003	Measurement and Geometry
18	F	003	Measurement and Geometry
19	C	003	Measurement and Geometry
20	J	003	Measurement and Geometry
21	C	003	Measurement and Geometry
22	G	003	Measurement and Geometry
23	A	003	Measurement and Geometry
24	H	003	Measurement and Geometry
25	A	003	Measurement and Geometry
26	H	003	Measurement and Geometry
27	D	004	Probability and Statistics
28	J	004	Probability and Statistics
29	A	004	Probability and Statistics
30	G	004	Probability and Statistics
31	C	004	Probability and Statistics
32	J	004	Probability and Statistics
33	A	004	Probability and Statistics
34	G	004	Probability and Statistics
35	A	005	Patterns, Functions, and Algebra
36	J	005	Patterns, Functions, and Algebra
37	A	005	Patterns, Functions, and Algebra
38	J	005	Patterns, Functions, and Algebra
39	C	005	Patterns, Functions, and Algebra
40	F	005	Patterns, Functions, and Algebra
41	B	005	Patterns, Functions, and Algebra
42	F	005	Patterns, Functions, and Algebra
43	A	005	Patterns, Functions, and Algebra
44	G	005	Patterns, Functions, and Algebra
45	B	005	Patterns, Functions, and Algebra
46	G	005	Patterns, Functions, and Algebra
47	D	005	Patterns, Functions, and Algebra
48	J	005	Patterns, Functions, and Algebra
49	A	005	Patterns, Functions, and Algebra
50	G	005	Patterns, Functions, and Algebra

Grade 8 Math, Core 1

If you get this many items correct:	Then your converted scale score is:
0	000
1	000
2	056
3	091
4	117
5	138
6	156
7	171
8	185
9	197
10	209
11	220
12	230
13	240
14	249
15	258
16	266
17	275
18	283
19	291
20	299
21	306
22	314
23	321
24	329
25	336
26	344
27	351
28	359
29	366
30	374
31	382
32	390
33	398
34	406
35	415
36	424
37	433
38	443
39	453
40	464
41	475
42	488
43	502
44	517
45	534
46	555
47	581
48	600
49	600
50	600

